



NAME _____

DATE _____

COMPARING LENGTHS

Resemblance of quantities.

1) Put the monkeys in order from tallest to shortest.



A



B




C

Correct order:


Monkey ___ is tallest.

Monkey ___ is shortest.


2) Put the elephants in order from tallest to shortest.



A



B



C

Correct order:

Elephant ___ is tallest.

Elephant ___ is shortest.

3) Put the packets in order from tallest to shortest.



A



B



C

Correct order:

Packet ___ is tallest.

Packet ___ is smallest.